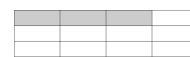



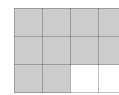
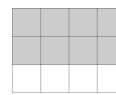
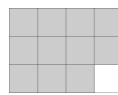

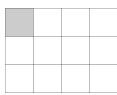
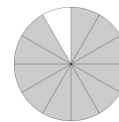


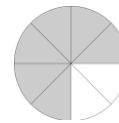

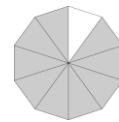
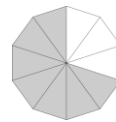
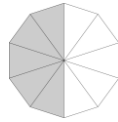
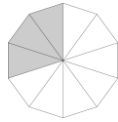
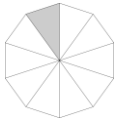
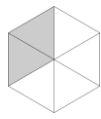
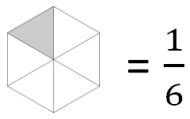
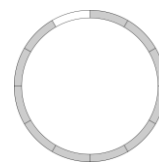
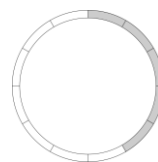
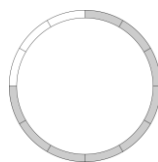
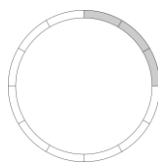
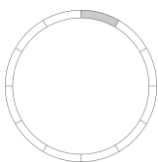


Matematika – procvičování zlomků graficky

1/ Vybarvenou část obrazce zapiš zlomkem podle příkladu



2/ Vybarvenou část mezikruží zapiš zlomkem



3/ Vybarvenou část papírového měřítka zapiš zlomkem

